



BUILDING BLOCKS OF MATHEMATICS



Fractions Activity Sheet

1. Fill in the blank:

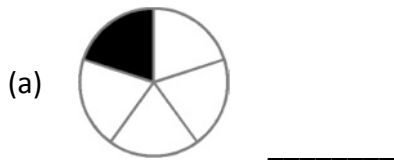
Fractions come from breaking a whole into _____ parts.

2. Fractions are written as 2 numbers separated by a line.

(a) What is the top number called? _____

(b) What is the bottom number called? _____

3. What is the fraction of the shaded area of each picture?



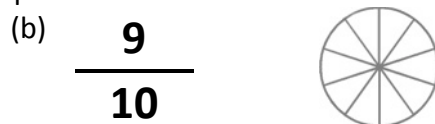
4. Locate these fractions on a number line.



5. Which fraction is larger? Colour the fraction to help find the answer.



OR

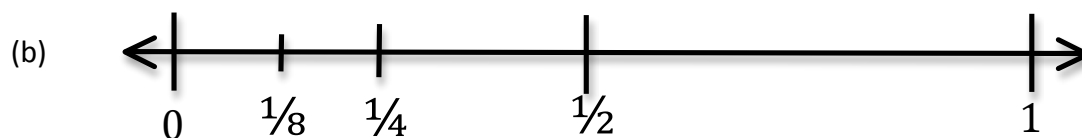
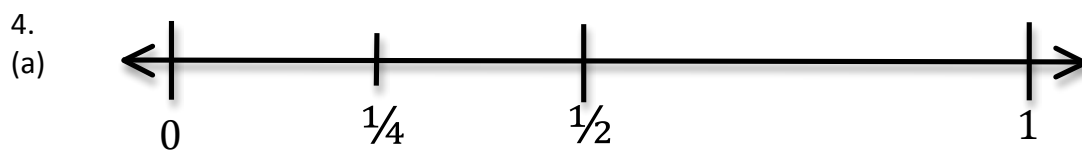


ANSWERS:

1. equal. Fractions come from breaking a whole into equal parts.

2. (a) The number on top is called the numerator.
(b) The bottom number is called the denominator.

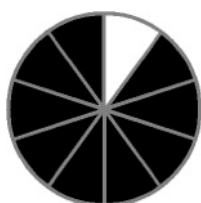
3. (a) $\frac{1}{5}$
(b) $\frac{1}{2}$
(c) $\frac{1}{3}$
(d) $\frac{1}{4}$



5. (b) $\frac{9}{10}$



$\frac{3}{10}$



$\frac{9}{10}$